



Ordering decimals

Name _____ Class _____ Date _____

1. Arrange the decimals in ascending order, which means from smallest to largest.

a) 8.73 8.7 8.07 8.3

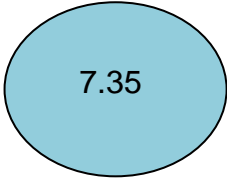
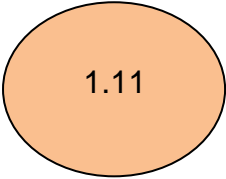
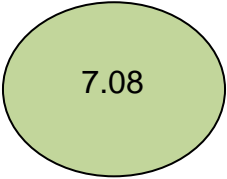
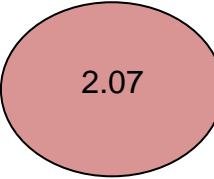
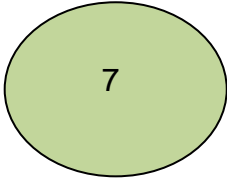

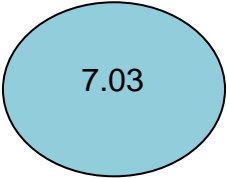





b) 4.26 4.02 4.2 4.06

2. Arrange the decimals in descending order, which means from largest to smallest.

a) 19.29 19.2 19.02 19.9

b) 2.36 2.02 2.3 2.6

3. Arrange these numbers in ascending order.

 7.35	 1.11	 7.08	 2.07
 7	 1.1	 7.03	 0.11
 2.17	 1.01	 7.8	 2.87
